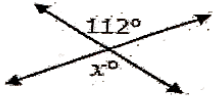



Examples 7 – 9: Find the missing angles.

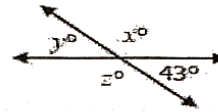
7.



8.

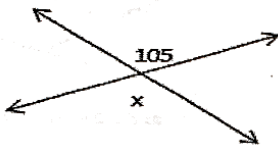


9.




Practice 10 – 12: Find the missing angles.

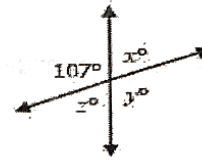
10.



11.

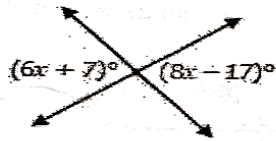


12.

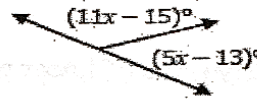


Examples 13 – 14: Find the value of each variable.

13.

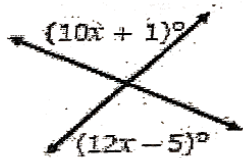


14.

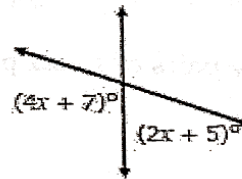


Practice 15 – 16: Find the value of each variable.

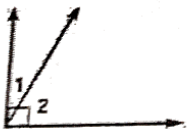
15.



16.



complementary angles – two angles that add up to 90°

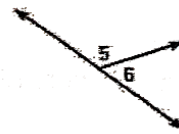


Adjacent

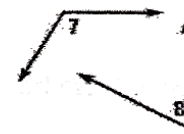


Nonadjacent

supplementary angles – two angles that add up to 180°



Adjacent



Nonadjacent